

DIVINE TRUST LEARNING CENTRE
POST COVID19 BASIC ASSESSMENT 2021
PRIMARY SIX SOCIAL STUDIES

Name: _____

SECTION A (40 MARKS)

1. Mention any one safety wear passengers use while on the road.
.....
.....
2. Name the country that borders Uganda in the South west?
.....
3. Why is it important to have a key on the map?
.....
4. Apart from conducting elections, state one other way of getting leaders.
.....
5. Mention any one economic activity the people of East Africa got involved in before the coming of foreigners.
.....
6. What is the smallest country in East African community?
.....
7. State any one way through which people destroy vegetation.
.....
8. Where did the Bantu migrate from East Africa?
.....
.....
9. In which direction does Uganda neighbor Rwanda?
.....
10. Which is the most swampy lake in Uganda?
.....
11. Name the common feature on a river that helps in the generation of Hydr-electricity.
.....
12. Why is English commonly used as official language in Uganda?
.....
13. What do you know about chief Awitch of Payera?
.....
.....

14. Give one reason why the British colonialists signed Agreements with the natives.

.....
.....

15. What type of rainfall is commonly received around large water bodies?

.....

16. Apart from budgeting, give any other way one can spend money wisely.

.....
.....

17. What is a swamp?

.....
.....

18. State any one importance of school holidays to school children.

.....

19. Why is budgeting important to people.

.....

20. Who is the highest civil servant in every government ministry?

.....
.....

21. Mention any one way in which vegetation affects population distribution in an area.

.....

22. How was the East African income Tax departments useful to East African countries?

.....

23. Mention any one human activity that mostly depends on day for its raw materials.

.....
.....

24. Mention one way early man trapped fast running animals.

.....

25. Why was sir Edward Muteesa II exiled to Britain in 1953?

.....

26. Give one way you can differentiate between a good leader and a bad leader.

.....
.....

27. How are export resources different from non export resources?

.....
.....

28. What name is given to the type of budget where the income is bigger than the expenditure?


.....

29. Mention one example of a health service provider in your community.

.....

30. Write in full the body that used to make laws before Uganda gained her Independence.

.....



31. What does the symbol above represent on the map?

.....

32. State one way Uganda is most likely to benefit from the fast growing population in the country.

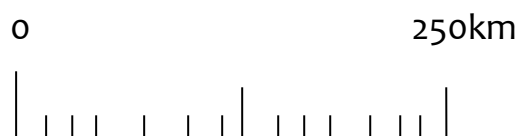
.....

.....

33. Identify the danger of volcanic mountains to people who live near them.

.....

34. How is the map element below useful to a map reader?



35. Identify one human activity that destroys the environment.

.....

36. How do roads promote trade?

.....

37. What name is given to the imaginary line of latitude marked 0°?

.....

38. How was the coming of foreigners a blessing to the people in Uganda?

.....

39. In which stanza of the Uganda National Anthem are the words “In peace and friendship we’ll live”?

.....

40. Give any one problem a family finds in looking after a big number of children.

.....

SECTION B.(60 MARKS)

41. Study the map of East Africa below and use it to answer the questions that follow.



(a) Why are there few game parks in the area marked xxxx on the map?

.....

.....

(b) State any two factors that have favoured commercial farming in the area marked M.

.....

.....

(c) Name the chief gold producer in East Africa.

.....

42.(a) What is ethnic group?

.....
.....
(b) Mention two ethnic groups that migrated into East Africa.

.....
.....
(c) Name the ethnic group that settled in the areas of the interlacustrine region.

43.(a) Who are voluntary leaders?

.....
.....
(b) Mention any two examples of voluntary leaders in your local community.

.....
.....
(c) Give one way people benefit from voluntary leaders.

44. (a) What is revenue?

.....
.....
(b) Give two sources of revenue to a country.

.....
.....
(c) What type of tax is collected from locally made items in a country?

45.(a) Write down the three organs of a democratic government.

.....
.....
(b) Identify the organ headed by the speaker.

46. (a) What are human basic needs?

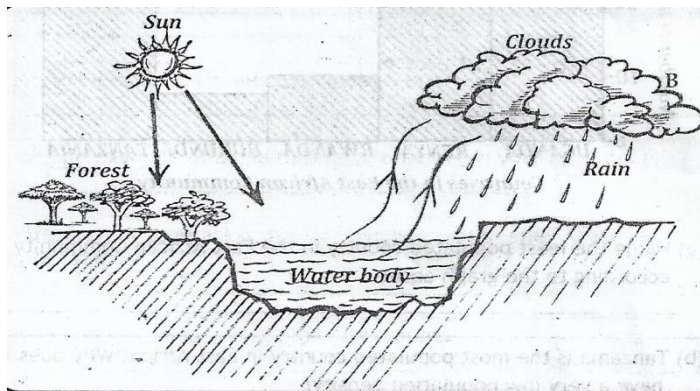
.....
.....
(b) Give any two examples of human basic needs of man.

.....
.....

(c) State any one way people get their human basic needs.

.....
.....

47.(a) The diagram below shows how rain is formed. Study it carefully and answer questions that follow.



(a) In which way is the sun important in the formation of rain?

.....
.....

(b) What happens to the trees in the forest as a result of continuous heating from the sun.

.....

(c) Give one reason why moisture forms clouds at point B?

.....
.....

(d) Name the type of rainfall shown in the diagram above.

.....

48. (a) Write IBEACO in full.

.....

(b) Who was the founder of the IBEACO?

.....

(c) Why was IBEACO formed?

.....
.....

(d) Name the British official who introduced activities of the IBEACO into Uganda.

.....

49. (a) Who were the first group of missionaries to come to Uganda?

.....

(b) Mention three problems that missionaries faced during their mission in East Africa.

.....
.....
.....
50. (a) Which ministry in Uganda is responsible for issuing the National identity cards?

.....
(b) Mention any one feature found on the National identity cards to the citizens.

.....
(c) Give any two reasons why the Government of Uganda is issuing out National identification cards to the citizens.

.....
51. (a) Mention one group of children with special needs in your community.

.....
(b) Give any two ways we can meet the needs of children with disabilities.

.....
(c) Give any two possible cause of the increasing number of children with special needs.

.....
52.(a) Give the meaning of the term diary farming

.....
(b) Mention any two products got from a diary farm.

.....
(c) state any one problem faced by diary farmers in East Africa.

.....
53.(a) Match each item in list A to the correct alternative in list B

List A(organs)

List B (functions)

Executive

interprets law and delivers

Justice

Judiciary

makes law which people respect

Legislature

runs daily activities of the EAC

Secretariat

implements decisions and programmes

(a) Executive:

(b) Judiciary:

(c) Legislature :

(d) Secretariat:

54. (a) What is stone age?

.....
.....

(b) Write down the three stages of the stone age.

.....
.....
.....

END.