

DIVINE TRUST LEARNING CENTRE

POST COVID 19 ASSESSMENT 2021

P.4 SOCIAL STUDIES

Time allowed: 2 hours 15 minutes.

Name:.....

SECTION A (40 MARKS)

1. Name the cardinal point of a compass that shows the position of the sun in the morning.
.....
2. What is another name for physical features?
.....
3. How is a drum important to people in your community?
.....
4. What title is given to a person who collects all the money and bank slips in a school?
.....
5. Why do children wear school uniforms?
.....
6. Mention any one role of policemen in the community.
.....
7. Name any one district in Uganda which is located with in Lake Victoria
.....
8. Which insects provide us with honey?
.....
9. Why do people stay in houses?
.....
10. How is a market useful to people in your community.
.....
11. Give one danger caused by Lakes and rivers.
.....
12. Mention any one example of cultural practices done by people in your district.
.....
13. Why do people keep dogs in their homes?
.....
14. How is a bell important in a school?
.....

15. What is a family?

.....
.....


16. State any one reason why people work in your area.

.....

17. What is trade?

.....
.....

18. In the space below, draw one item used for cleaning the house.




19. Mention any one use of water at your home.

.....

20. Why is the growing of cash crops important to people in your district?

.....

21. Draw the map of a table in the space below.



22. Identify any one type of family you know.

.....

23. Which social service is provided at school?

.....

24. Identify any one raw material used to make crafts.

.....

25. Name any one major cash crop grown in your community.

.....

26. Why do people visit health centres?

.....

27. What title is given to the person in charge of children's rights at the local council / village committee.

.....

28. Mention any one activity carried out by people on the lakes.
.....
29. Give any one reason why people plant trees in their compounds.
.....
30. State any one value of keeping domestic animals.
.....
31. Give any one raw material used for building houses.
.....
32. Name the main natural source of water used in your community.
.....
33. Why do farmers carry out winnowing after harvesting their crops.
.....
34. Write N.F.A in full.
.....
35. Which language is officially used at school?
.....
36. Give any one common activity carried out by people in forests.
.....
37. Why are swamps useful to people?
.....
38. State the main duty of police in your community.
.....
39. Give any one problem faced by farmers who grow crops in highland areas.
.....
40. How useful is a carpenter to the school.
.....

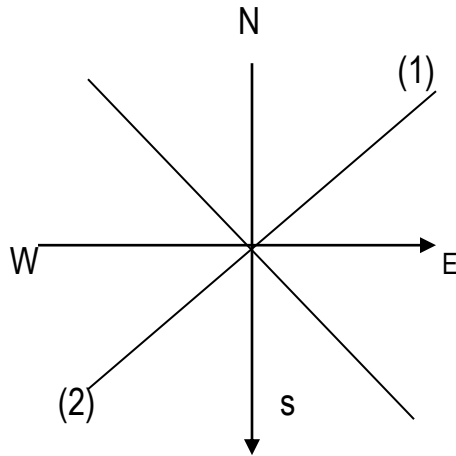
SECTION B (60 MARKS)

41. (a) Give any two reasons why farmers grow crops.
.....
.....
- (b) State any two ways farmers care for their domestic animals.
.....
.....
42. (a) Name any two elements of weather.
.....
.....
- (b) Write down any two activities done by farmers in the wet seasons.

.....
.....
43. (a) Write down any two important places in your community.

.....
.....
(b) Give any one way each of the above places is important to people in your community.

.....
44. (a) Name the semi cardinal points of a compass marked 1 and 2.



(i) 1: _____

(ii) 2: _____

(b) Name two groups of people who use a compass when doing their work.

.....
45. (a) List down any two symbols of a school.

.....
.....
(b) How are the following people important in a school?

(i) Bursar:

(ii) Nurse:

46. (a) write down two ways animals benefit from natural vegetation.

.....
.....
(b) Give any two ways how people benefit from natural vegetation.

.....
47. (a) Write down any two ways how people use land in your community.

.....
.....
(b) Give any two ways people care for land in your community.

.....
.....
48. Mention any one product got from each of the following crops.

(a) Maize:.....

(b) Tobacco:.....

(c) Sugarcane:.....

(d) Cotton:.....

49. (a) What are human basic needs?

.....
.....

(b) List down any two problems people face in meeting their basic needs.

.....
.....

50. (a) Who is a leader?

.....
.....

(b) Mention any three qualities of a good leader.

.....
.....
.....

51. (a) What is a swamp?

.....
.....

(b) Mention any two crops grown in a swamp.

.....
.....

(c) Why is it bad to destroy swamps?

.....
.....

52. (a) Write down two uses of wind.

.....
.....

(b) How are the following weather instruments important at a weather station?

(i) Rain gauge:

.....

(ii) Barometer:

.....

53. (a) State any two uses of rivers to people who live near them.

.....
.....

(b) Give any two ways how people misuse lakes and rivers.

.....
.....

54. (a) What is communication?

.....
.....

(b) Apart from communication, mention any two other examples of social services in your community.

.....
.....

(b) State any one problem affecting social services in your community.

.....

55. Match the weather elements in list A with their uses in list B correctly.

List A

Rain gauge

Wind sock

Barometer

Sunshine recorder

List B

measures air pressure

records the duration of bright
sunshine in a day

measures the amount of rainfall

shows the strength of wind

(i) Rain gauge: _____

(ii) Wind sock: _____

(iii) Barometer: _____

(iv) Sunshine recorder: _____

END.