

DIVINE TRUST LEARNING CENTRE
POST COVID 19 ASSESSMENT 2021
P.3 LITERACY ONE

Name: _____

School: _____

Class: _____ District: _____

SECTION A (40 MARKS)

1. Name one element of weather.

.....

2. Timothy brushes his teeth every day. Give any one reason why he does so.

.....

3. Mention one role of the family member below.



4. Mention any one example of food you know.

.....

5. Name one benefit the school gets from its neighbours.

.....

6. Name one common accident you know.

.....

7. State any one thing we make which is used as a play material.

.....

8. In which sub-county is your school?

.....

9. Give one importance of keeping peace and security.

.....

10. Mention any one way of caring for animals.

.....

11. How are fruits important to our bodies?

.....


12. Name any one component of environment.

.....

13. Name any one dangerous object that can cause accidents.

.....

14. Name one activity done in the important place below.



.....

15. Give one way how crafts are important to man.

.....

16. Draw any one food preserved by smoking.

17. Mention the tool used by policeman to keep peace and security.

.....


18. Why is it good to preserve food?

.....

19. Salma is a farmer. Name any one condition that helps her plants to grow well.

.....

20. In which season is the activity below done?



.....

21. How is the road sign below useful to pedestrians?



.....

22. Cow is to horns as _____ is to changing colours.

23. Give any one activity done in the wet season.

.....

24. On which part of an insect are legs and wings attached.

.....

25. Mention one effect of insecurity in our community.

.....

26. Name one effect of accidents.

.....

.....

27. Name one symbol of a school.

.....

28. Which animal provides man with ivory?

.....

29. Why is food known as a basic need?

.....

30. Name any one member of a nuclear family.

.....

31. Name one source of food.

.....

32. Draw a first aid box in the space below.



33. Give any one group of people who keep peace and security.

.....


34. Give any one sign of malnutrition.

.....

35. Mention the quickest type of transport.

.....

36. Which accident can be caused by the objects below?



.....

37. Give any one reason why we boil drinking water.

.....

38. Write down any one type of holiday.

.....

39. Name any one practice that helps to promote peace at school.

.....

40. How useful is a bell to a school?

.....

SECTION B (60 MARKS)

41. Give the roles of different people in the community.


- (i) Policeman _____
- (ii) Carpenter _____
- (iii) Nurse _____
- (iv) Teacher _____

42. Draw the following things used in giving First Aid.

bandage	cotton wool	medicine	razorblade

43. Name any four examples of cultural practices.

44. The picture below shows parts of an insect. Answer questions about it.



(a) Name part marked B.

.....

(b) How useful are parts marked Z, X and C to an insect?

Z : _____

X : _____

C : _____

(c) How many body part has a true insect have?

.....

45. Name any four classroom objects.

.....

.....

.....

.....





46. Give any four types of transport.

.....
.....
.....
.....

47. Mention any three means of transport.

.....
.....
.....

48. Study Eva's shopping list below and answer correctly.

Sweet 	apple 	book 	pen 
Shs. 200	Shs. 1000	Shs. 1000	Shs. 500

(a) What is the cost of a sweet?

.....

(b) Which item costs shs. 500?

.....

(c) Which items have the same price?

.....

(d) What item has the smallest amount of money?

.....

49. Name any four activities done in your community.

.....
.....
.....
.....


50. (a) Name any two examples of common diseases

.....
.....

(b) Give two ways of preventing diseases.

.....
.....

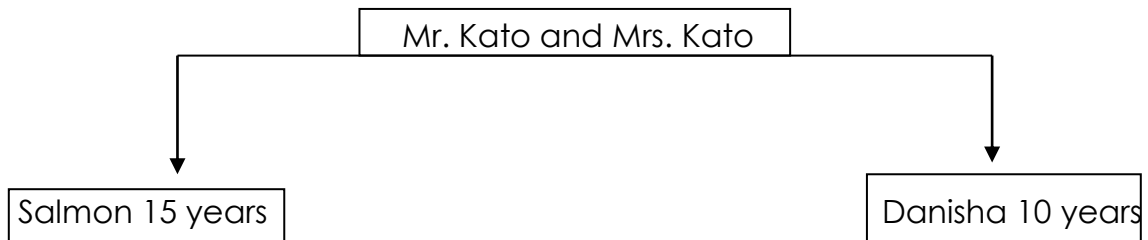
51. Name the stages of a plant.



52. Mention any four materials used to make things.

.....
.....
.....
.....

53. Study the family below and answer the questions correctly.



(a) Whose family is shown above?

.....

(b) How is Salmon related to Danisha?

.....

(c) How many sons does Mr. Kato have?

.....

(d) Who is the youngest in Mr. Kato's family?

.....

54. State any four ways of maintaining personal hygiene.

.....
.....
.....
.....

55. Name any four important places in our community.

.....

.....

.....

.....

END.