

DIVINE TRUST LEARNING CENTRE
POST COVID 19 ASSESSMENT 2021
PRIMARY ONE MATHEMATICS.

Name: _____

Class: _____

School: _____

1. Write their place values.

<p>(a) 2 6</p> <p>_____</p> <p>_____</p>	<p>(b) 5 0</p> <p>_____</p> <p>_____</p>
<p>(c) 1 3</p> <p>_____</p> <p>_____</p>	<p>(d) 9</p> <p>_____</p> <p>_____</p>

2. Fill in the missing numbers.

(a) 15, 16, _____, 18, 19, _____, 21.

(b) 36, 37, _____, _____, 41, 42.

3. Circle the bigger number.

- | | |
|--------|---------|
| 8 or 2 | 4 or 1 |
| 3 or 7 | 2 or 0 |
| 2 or 6 | 7 or 10 |

4. (a) Which day of the week comes before Wednesday?

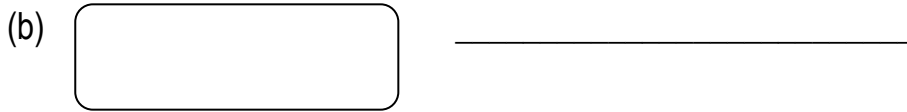
(b) How many days make a week?

5. Count in twos.

(a) 2, 4, 6, _____, _____, 12, 14.

(b) 24, 26, _____, 30, _____, 34.

6. Name the set.



(c) Write any two other examples of sets.

(i) _____

(ii) _____

7. Write "empty set" or "not empty set".

(a) A set of 3 boys running _____

(b) A set of 4 girls with 2 heads each _____

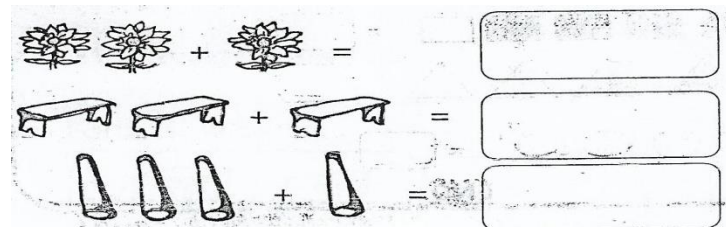
(c) A set of cats driving cars _____

(d) A set of 2 cows eating grass _____

8. Match numbers symbols to number names.

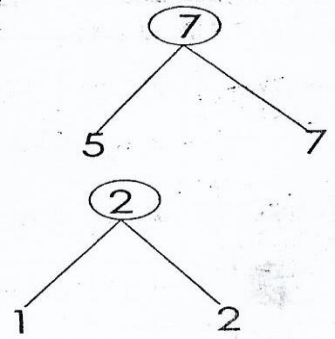
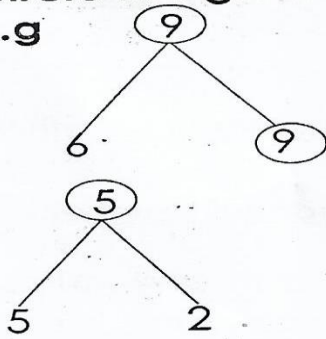
4	zero
2	one
0	four
1	five
3	two
5	three

9. Join these:




10. Circle the given number.

Circle the given number.
e.g




11. Draw the sets.

A set of 5 chairs




A set of 2 pens.



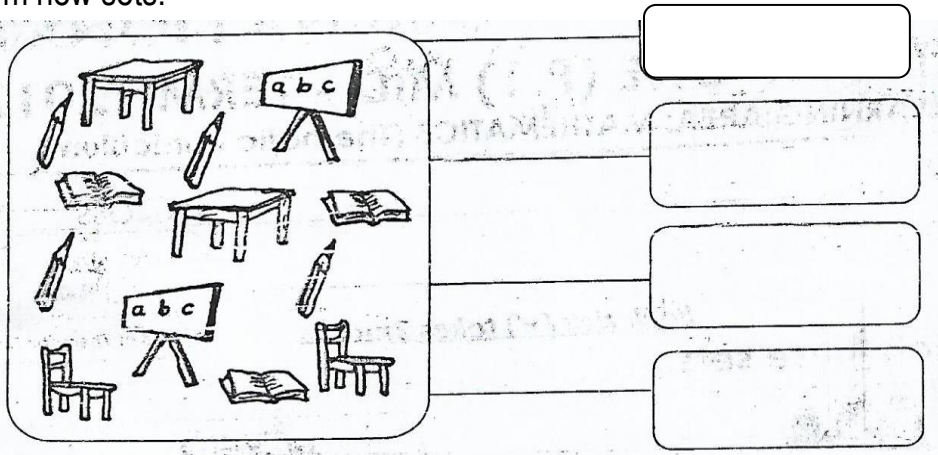
A set of 3 books



A set of 4 pencils



12. Form new sets.



13. Write the number that comes after.

38, _____

20, _____

14. Write these numbers starting with the smallest to the biggest.

(a) 6, 8, 5, 2 _____

(b) 10, 20, 01, 02 _____

(c) 11, 15, 20, 10 _____

15. Draw these shapes.

Square	Rectangle

16. Add correctly.

(a) $5 + 4 + 3 =$

(b) $9 + 2 + 0 =$

17. Write number names.

(a) 38 _____ (b) 47 _____

18. Add:

(a)


T	O
3	2
+4	5
<hr/>	
<hr/>	

(b)


T	O
5	6
+4	3
<hr/>	
<hr/>	

19. Read and draw.

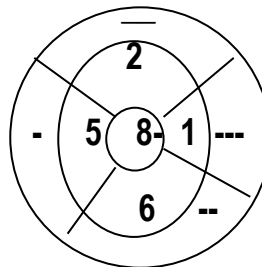
(a) Fourteen eggs.



(b) Fifteen trees.



20. Subtract the numbers.



END.