

DIVINE TRUST LEARNING CENTRE
POST COVID 19 ASSESSMENT 2021
MATHEMATICAL CONCEPTS.

Name: _____

School: _____

Class: _____

1. Fill in the missing numbers.

1 ____ 3 ____ 5 ____ 7 ____ 9 ____ 11 ____ 13 ____ 15 ____
17 ____ 19 ____.

2. Write the next number.

1, 2 ____

6, 7 ____

10, 11 ____

9, 10 ____

5, 6 ____

3. Read and draw.

Circle	rectangle	cone	square	triangle

6. Draw for the number.

9 = 0 0 0 0 0 0 0 0 0

8 = _____


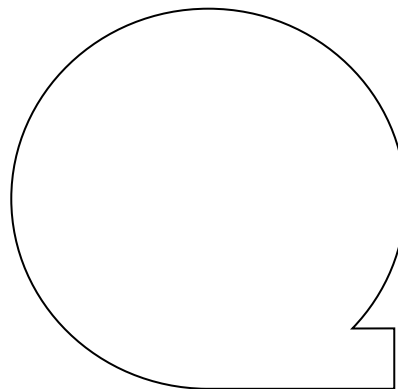

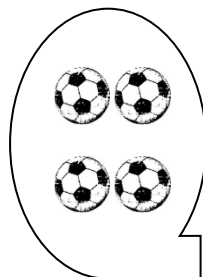
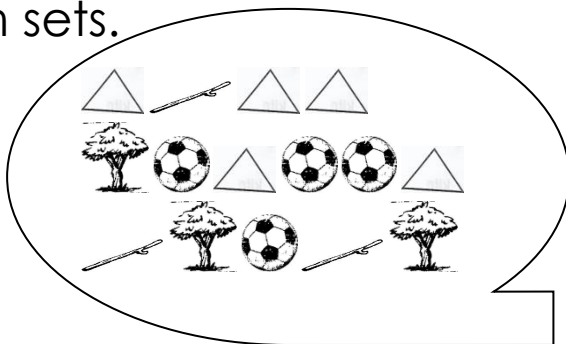
2 = _____

6 = _____

4 = _____

10 = _____

7. Form sets.



8. Match .


A big pot



A small book



A short tree



A long stick



END.